


Name: _____

Measuring Centimeters

Measure each object with the ruler shown. Round to the nearest centimeter.

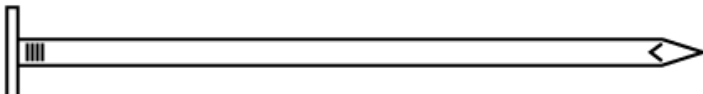
a.



b.



c.



d.




ANSWER KEY

Measuring Centimeters


Measure each object with the ruler shown. Round to the nearest centimeter.

a.



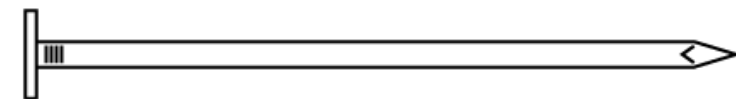
4 cm

b.



15 cm

c.



9 cm

d.



5 cm